

Name _____

Period _____

**Chemistry Practice Test
Electrochemistry**

Form P

Part I: Determine the oxidation number of vanadium in the following compounds:

1. V_2O_5 1. _____

2. VO_4^{3-} 2. _____

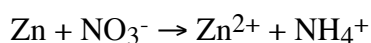
3. VCl_3 3. _____

4. VO^{3+} 4. _____


5. VC 5. _____

Part II: Balance the following equations that occur in acidic solution:

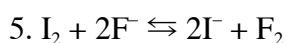
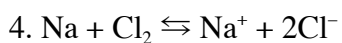
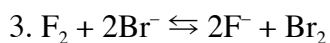
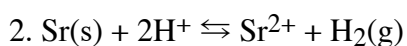
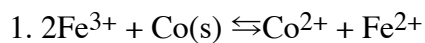
a)



b)



Part III: Determine if the following reactions are spontaneous using an EMF table:



Part IV: Identify the species that is oxidized and the one that is reduced. Identify the oxidizing and reducing agents. If it is not a redox reaction write none for both answers.

1.



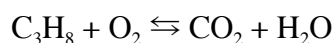
Oxidized _____

Reduced _____

Oxidizing Agent _____

Reducing Agent _____

2.



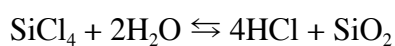
Oxidized _____

Reduced _____

Oxidizing Agent _____

Reducing Agent _____

3.



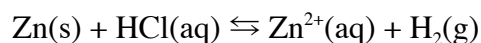
Oxidized _____

Reduced _____

Oxidizing Agent _____

Reducing Agent _____

4.



Oxidized _____

Reduced _____

Oxidizing Agent _____

Reducing Agent _____

Part V: Electrochemical Cells.

Draw an electrochemical cell based on the reaction between Zinc and Copper. Write the overall spontaneous reaction that occurs and calculate the EMF for the cell. Label the anode, cathode, salt bridge, show the ion flow, flow of electrons, positive electrode, and negative electrode. Show which electrode grows and which one shrinks..

Part VI: Definitions

Provide definitions for the following terms.

Oxidation

Reduction

Oxidizing Agent

Reducing Agent

EMF

Anode

Cathode

Salt Bridge